

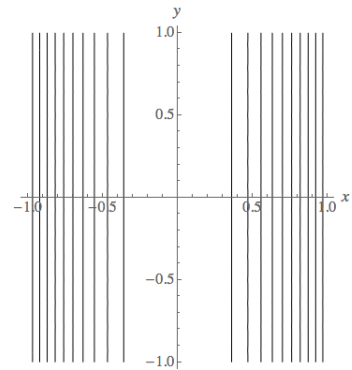
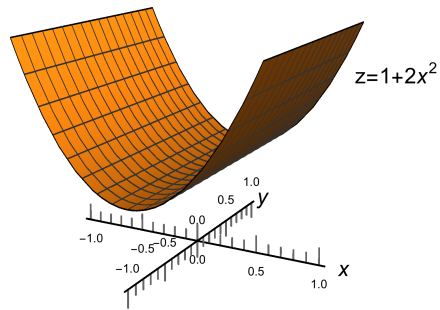
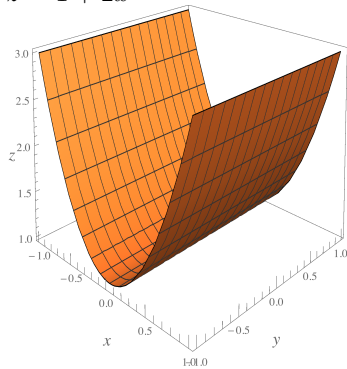
Math 253

Matching Problems

Match the correct function with the correct surface graph with the correct level curves.

Surfaces and Level Curves

$$z = 1 + 2x^2$$



$$z = 1 + 2y^2$$

