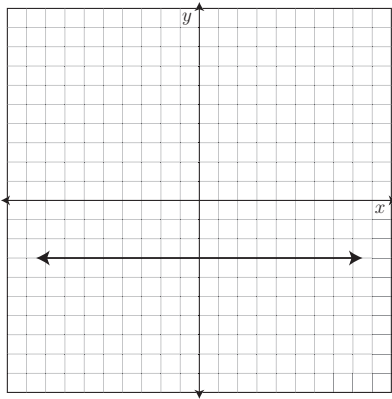


Show all relevant work!

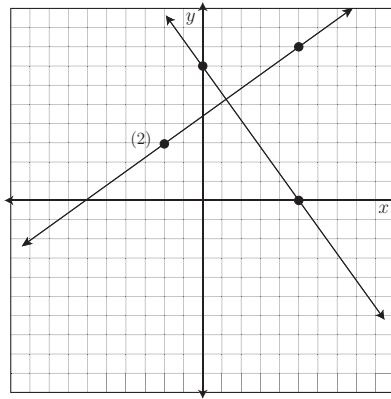
1. Write the equations of the lines graphed below.

(a)



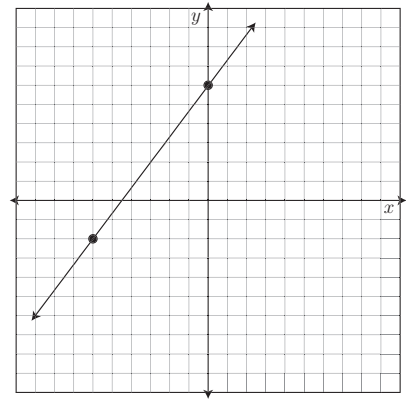
**Ans:**  $y = -3$

(b)



**Ans:**  $y = -\frac{7}{5}x + 7$

(c)



**Ans:**  $y = \frac{4}{3}x + 6$

2. Graph the line perpendicular to 1(b) above that contains the point
- $(-2, 3)$
- .

**Ans:** (See Graph)

3. The table for a linear equation is started below.

(a) Fill in the rest of the table.

$x$	0	3	6	9	12
$y$	19	14	9	4	-1

(b) Write the equation of the line for this table.

**Ans:**  $y = -\frac{5}{3}x + 19$

4. Complete this table for the line through
- $(-2, 5)$
- that is perpendicular to the line in 3.

$x$	-12	-7	-2	3	8
$y$	-1	2	5	8	11

5. The balance of Clarence's bank account is graphed below.

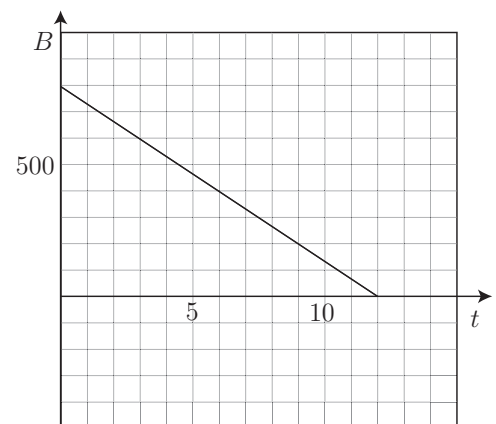
If  $B$  measures his balance in dollars and  $t$  is time in months, answer the following questions.

(a) How fast is Clarence spending money?

**Ans:**  $\frac{\$200}{3 \text{ months}}$  so \$200 every three months (or  $\sim$  \$67 per month)

(b) Write an equation for the balance of Clarence's account over time.

**Ans:**  $B = -\frac{200}{3}t + 800$

(c) What is the  $B$  intercept and what does it tell you?**Ans:**  $(0, 800)$ . Clarence started with \$800 in his account.(d) What is the  $t$  intercept and what does it tell you?**Ans:**  $(12, 0)$ . After 12 months Clarence is out of money.(e) What happens after the  $t$  intercept (give a contextual interpretation).**Ans:** Clarence would be overdrawing his account if the model kept on going.

6. Juan owns a propane-gas barbecue grill with a tank that holds 5 gallons of propane. He always sets the temperature at  $350^{\circ}\text{F}$ , which uses 0.125 gallons of propane per hour. Let  $g$  be the number of gallons of propane that remain in the tank after  $t$  hours of cooking since the tank was filled. Write an equation for  $g$  in terms of  $t$ .

**Ans:**  $g = -0.125t + 5$

7. My garbage company charges \$12 to pick up one can of garbage and \$28 to pick up 3 cans.  
(a) What is the company's per can charge?

**Ans:**  $\frac{\$28 - \$12}{3 - 1 \text{ cans}} = \$8 \text{ per can.}$

- (b) Write a linear formula for the cost,  $C$ , of having  $n$  cans of garbage picked up.

**Ans:**  $C = 8n + 4$  Notice that the charge for one can is \$12 while the per can cost is \$8 so there must be a pick-up charge of \$4.

- (c) What is the  $C$  intercept and what does it mean in this context?

**Ans:** The  $C$  intercept is  $(0, 4)$ . See above - it's the pick-up charge for coming to collect the garbage (whether I put out cans or not).